
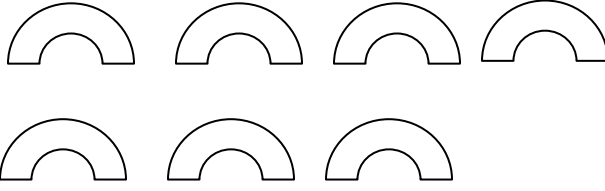


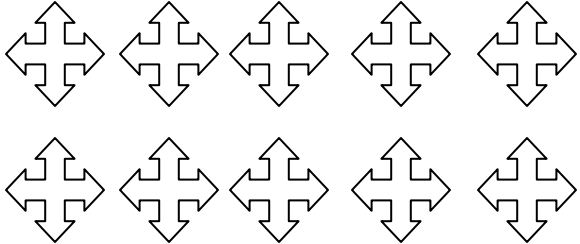
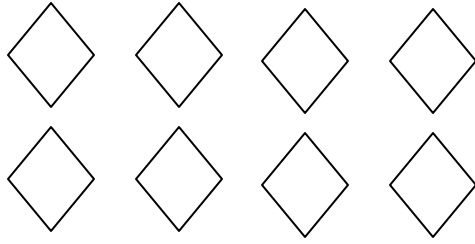


英华幼儿园回家作业 due on 3/30/15-减法

姓名: _____ Parents Signature: _____

一. 写一写减法。

 $5 - 1 = \boxed{4}$	 $7 - 3 = \boxed{}$
 $6 - 5 = \boxed{}$	 $9 - 7 = \boxed{}$
 $10 - 4 = \boxed{}$	 $8 - 2 = \boxed{}$

二. 做减法.

$5-2=\square$	$8-4=\square$
$7-3=\square$	$9-9=\square$
$9-5=\square$	$8-3=\square$
$10-2=\square$	$6-5=\square$

三. 应用题。

妈妈有十个糖果，弟弟吃了五个，妈妈还剩下几个糖果？

Mom has ten candies, little brother ate five, how many candies does mom have?

	$\square \bigcirc \square \bigcirc \square$ 还剩下 \square 个糖果。
--	---

